


8 *Part A* Construct a bar graph on the grid below using the data in the test book.

THINK
SOLVE
EXPLAIN

Be sure to:

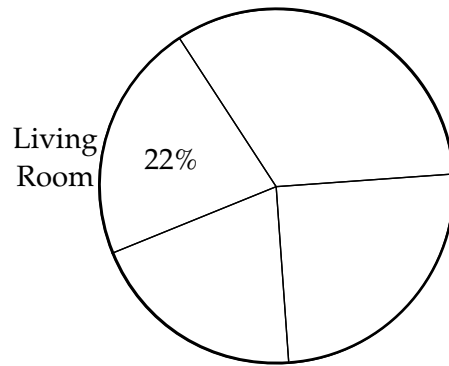
- title the graph
- label the axes
- use appropriate and consistent scales
- graph the data



Part B Complete the circle graph below using the data in the test book.

Be sure to:

- title the graph
- label each section with the name of the appropriate room and the percent rounded to the nearest whole percent

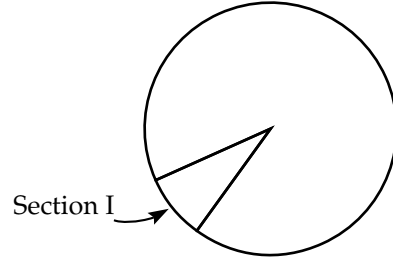


Part C Use the information from both graphs to justify your answer.

9 F G H I 10 A B C D 11 F G H I


12 Show your work or explain in words.

THINK
SOLVE
EXPLAIN




Estimate _____

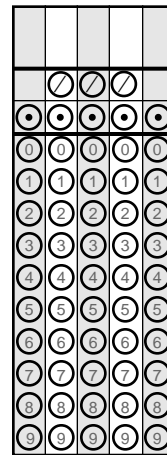
13



14



15



This is the end of the Sample Answer Book.

